







ARMY PUBLIC SCHOOL, BIRPUR, DEHRADUN
HOLIDAY HOMEWORK
SESSION 2023-2024
CLASS: I

NAME- _____ CLASS/SEC- _____ ROLL NO.- _____




Q1. Fill in the blanks with a or an.

- (a) Will you lend me _____ eraser  and _____ pencil. 
- (b) _____ apple  is red in colour.
- (c) Tia likes to eat _____ ice cream. 

Q2. Underline the joining words.

- (a) Me and my sister went to the park.
- (b) I like to play with bat and ball.
- (c) Tanish likes to eat an apple and a chocolate.

Q3. Underline the position words in the following sentences.

- (a) The tigers are in the zoo. 
- (b) There is a glass on the table. 
- (c) The shoes are under the chair 

Q4. Look at the picture and tick the correct options.

- (a) The books are under the table. ☐
- (b) The books are on the table. ☐
- (c) The books are in the table. ☐



Q5. Look at the picture and circle the correct position words.

(a) The ball is (in,on) the basket.



(b) The cat is sitting (in ,on) a mat.



Q6. Fill in the blanks with correct options.

(a) Fruits _____ good for health. (is, are)

(b) My name _____ Tanish. (am, is)

(c) The boys _____ swimming (are, is)

Q7. Circle the words that should start with capital letter and write the correct answer in the given blanks.

(a) desk (b) boy (c) delhi (d) bun _____

(a) agra (b) bat (c) city (d) cloud _____

(a) bell (b) parrot (c) april (d) tiger _____

(a) man (b) tanya (c) chair (d) box _____

(a) ball (b) pen (d) lion (d) france _____

Q8. Do the following.

(a) Read the lesson "The Bear and Two Friends".

(b) Learn the poem "Mother Shake the Cherry-tree".

(c) Learn the Question and Answers of the poem
"Mother Shake the Cherry-tree"

MATHEMATICS

Q1) Multiply the following and write the answer.



$$\square \times \square = \square$$

How many cherries are there?



$$\square \times \square = \square$$

How many penguins are there?



$$\square \times \square = \square$$

How many spider legs are there?

Q2) Divide the given questions and choose the correct options-

SWEET DIVISION



Solve the word problems.

There are 8 blueberry muffins. Max and Bryan want to divide them equally onto 2 plates. How many muffins will be on each plate? Check the correct answer.



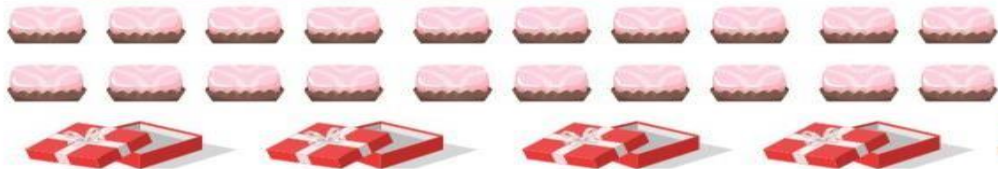
$$2 \overline{)8}$$

6

4

2

There are 20 chocolate candies. The children want to divide them equally into 4 boxes. How many chocolate candies will be in each box? Check the correct answer.



$$4 \overline{)20}$$









5

8

6







Q3) How long are these objects?

		<input type="text"/> cm
		<input type="text"/> cm
		<input type="text"/> cm
		<input type="text"/> cm


Q4. Answer the following questions-

Number of votes

			
★ ★ ★ ★ ★ ★	★ ★ ★ ★ ★	★ ★ ★ ★ ★ ★ ★ ★ ★ ★	★ ★ ★ ★ ★ ★ ★
Guitar	Drums	Piano	Flute


★ = 1 vote

- Which instrument got the most votes?
- Which instrument got five votes?
- How many more votes did the guitar have than the drums?
- How many votes did the piano and flute have together?


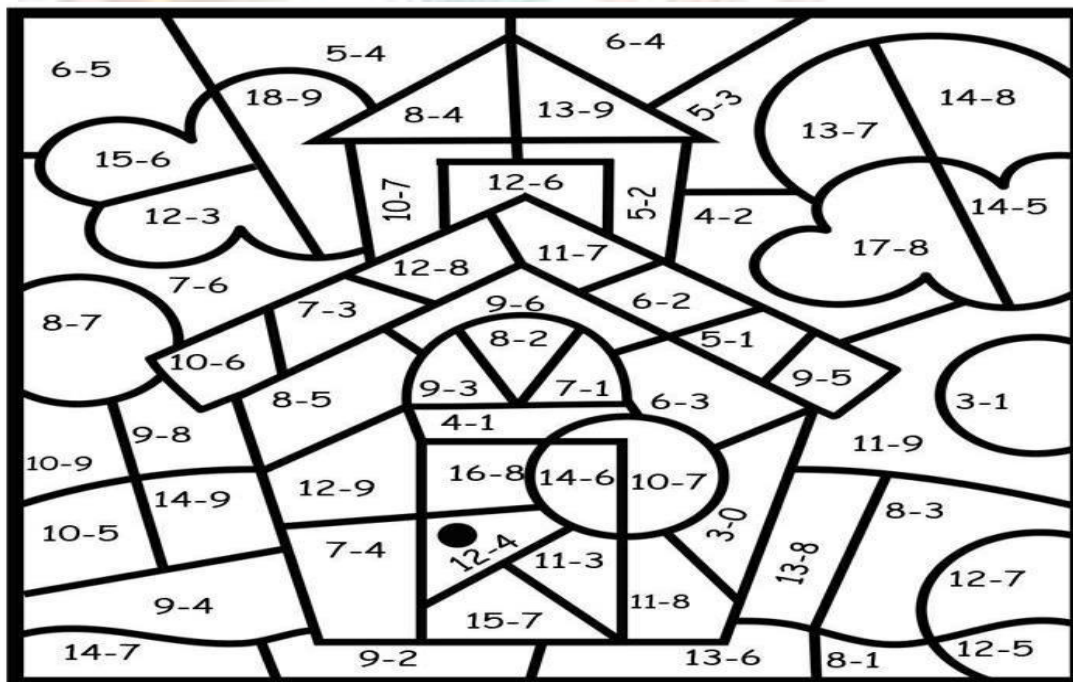


Q5) Add the given questions and follow the given directions-

Color Code	
26	red
29	orange
38	green
54	purple
87	yellow



Q6) Subtract the given questions and follow the given directions-



Q7) Make division wheel with the help of given link.

<https://youtu.be/alcweL9JsdU?feature=shared>

Q8) Learn table of 6 and 7

Q9) Revise all the concepts taught in the class.

ENVIRONMENTAL SCIENCE

“A family vacation is a good time to bond and make memories that last a lifetime.”

Spend quality time with your family and friends. Click photographs and paste it in your scrapbook.

Learn all the work done in EVs book and notebook for EVIII.

HINDI

1. नीचे दिए गए वाक्यों में से संज्ञा नाम वाले शब्दों को घेरा लगाए ; -

लता हलवा बना रही है।

क. मैं पाठशाला जा रहा हूँ।

ख. मेरी कमीज नीली है।

ग. शेर तेज दौड़ता है।

घ. अजय पढ़ रहा है।

ङ. राजू जलेबी खा रहा है।

2. निम्नलिखित शब्दों में से फूलों के नाम अलग कीजिए -

पा	रि	जा	त	ल
मे	गु	फ	म	च
कि	ला	क	सा	मे
श	ब	दा	लि	ली
ज्ञ	गें	कु	सु	म

1. _____
2. _____
3. _____
4. _____
5. _____
6. _____

3. दिए गए खाली स्थान में उचित संज्ञा शब्द भरे -

तितली घर , दिल्ली , कोयल , शेर , आसमान ,
बच्चे , फल , मछली , पतंग

क. जंगल का राजा _____ है।

ख. फूल पर _____ बैठी है।

ग. मोहन का _____ है।

घ. बगीचे में _____ खेल रहे हैं।

ङ. रमेश _____ उड़ा रहा है।

च. _____ नीला है।

छ. तालाब में _____ तैर रही है।

ज. _____ गाना गा रही है।

झ. लाल किला _____ में है।

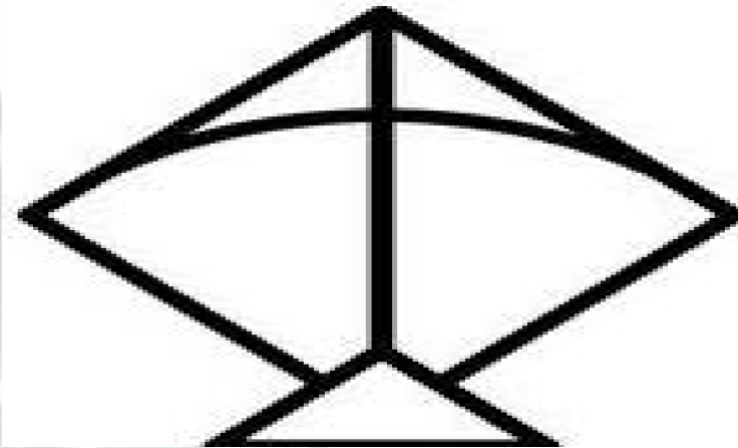
ञ. पिताजी बाजार से _____ लाए हैं।

4. नीचे दिए गए शब्दों के लिंग बदलकर लिखिए -

पुर्लिंग	स्त्रीलिंग
लड़का	
बेटा	

दादा	
नाना	
मौसा	
शेर	
नाती	
माता	

5. दिए गए चित्र में रंग भरिए _



6. स्वर और व्यंजन लिखिए-



7. कविता बरखा रानी याद करो |

8. EVIII में आने वाले सभी पाठ पढ़ें |

नोट – इस वर्कशीट का प्रिंटआउट निकालकर आप इसी में कार्य करेंगे |

---- HAPPY NEW YEAR AND HAPPY HOLIDAYS ----